

Pumpkin Fun I-Spy Numbers

Pumpkin Fun I-Spy Numbers

Pumpkin Fun I-Spy Numbers


Pumpkin Fun I-Spy Numbers

Pumpkin Fun I-Spy Numbers

Pumpkin Fun I-Spy Numbers

Write the number in the box and write the numbers that come before.

ICAN ...




Spy a number

Show the number in a ten frame and then finish the number sentence to say how many more are needed to make ten.

$10 - \square = \square$



ICAN ...



Spy a number

Write the number in the box and write the numbers that come after.




Pumpkin Fun I-Spy Numbers

Write the number in the box and write the numbers that come before.

Pumpkin Fun I-Spy Numbers

Write the number in the box and write the numbers that come before.



ICAN ...



Spy a number

Write the number in the box and write the numbers that come before and after.



ICAN ...



Spy a number

Write the number in the box and write the numbers that come before.

ICAN ...



Spy a number

Write the number on the line and make that many in the box.

ICAN ...



Spy a number

Write the number on the line and show it in a ten frame.
